



INDIAN SCHOOL AL WADI AL KABIR
DEPARTMENT OF MATHEMATICS 2025 – 2026

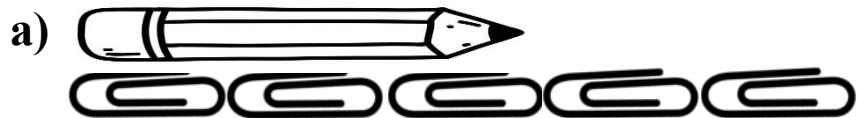
TOPIC: MEASUREMENT OF LENGTH

Worksheet - 1

RESOURCE PERSON: Mrs. Sunita S Bhadra

NAME: _____ CLASS: I SEC: _____ DATE: _____


1. How long is each object?



The pencil is _____ clips long.



The toothbrush is _____ clips long.



The key is _____ clips long.

CHECKED BY: ACADEMIC COORDINATOR – CLASS - I
ISWK /DEPARTMENT OF MATHEMATICS – 2025 -2026



INDIAN SCHOOL AL WADI AL KABIR
DEPARTMENT OF MATHEMATICS 2025 – 2026


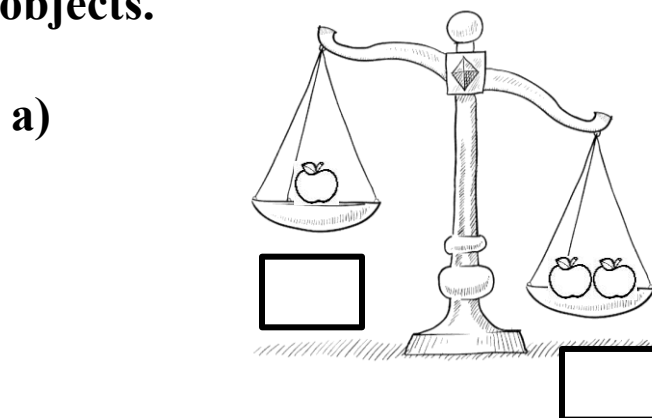
TOPIC: MEASUREMENT OF Weight

Worksheet - 2

RESOURCE PERSON: Mrs. Sunita S Bhadra

NAME: _____ CLASS: I SEC: _____ DATE: _____

Write (H) for heavy and (L) for light objects.



CHECKED BY: ACADEMIC COORDINATOR – CLASS - I
ISWK /DEPARTMENT OF MATHEMATICS – 2025 -2026

CHECKED BY: ACADEMIC COORDINATOR – CLASS - I
ISWK /DEPARTMENT OF MATHEMATICS – 2025 -2026

